

TRAIL POST 4



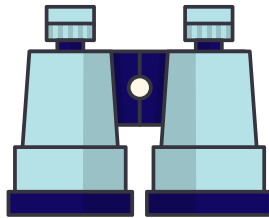
CAMP STORE

There are some great items to purchase at the Camp Store, but there is no calculator!
You need some good brain power for this one!

You have been given \$50 to shop for supplies at the camp store. Using the items below and their cost, what would you buy? Circle the items you would choose.




\$4




\$9




\$6



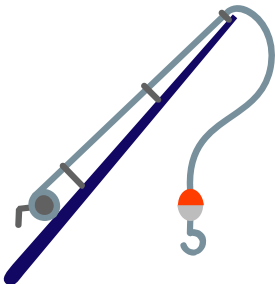
\$10




\$11




\$20



\$7



\$5



\$3



TRAIL POST 4

Be sure to show your thinking on how you got your answers!



What is the total of all your items? \$ _____

What would your change be if you paid with a fifty dollar bill?
\$ _____

You spent \$15 at the Big Bear Camp Store. Which two items could you have purchased?

Are there other items you could purchase with only \$15?

You spent exactly \$30. What could you have purchased?

